

**THE UNITED REPUBLIC OF TANZANIA  
PRESIDENT'S OFFICE REGIONAL ADMINISTRATION AND LOCAL GOVERNMENTS  
MALINYI DISTRICT COUNCIL  
FORM TWO MOCK EXAMINATION AUGUST 2019**



**041**

**BASIC MATHEMATICS**

**TIME; 2½ HRS**

**Monday 26/08/2019 a.m**

**INSTRUCTIONS:**

1. This paper consists of two (2) section A and B.
2. Answer all questions in both sections
3. Show all your work clearly.
4. Mathematical table and geometrical instruments may be used.

<b>FOR EXAMINERS' USE ONLY</b>		
<b>QUESTION NUMBER</b>	<b>SCORE</b>	<b>EXAMINERS' INITIALS</b>
<b>1</b>		
<b>2</b>		
<b>3</b>		
<b>4</b>		
<b>5</b>		
<b>6</b>		
<b>7</b>		
<b>8</b>		
<b>9</b>		
<b>10</b>		
<b>TOTAL</b>		

**SECTION A: (60 MARKS)**

1. Change the order of digits in 47988 to make

(a) The largest possible number

(b) The smallest possible number.

2. (a) Solve the equation  $\sqrt{\frac{V+2}{V-2}} = \frac{1}{2}$

(b) Make L subject of the formula and express each in its simplest form  $M = \frac{PL}{L+rCR}$

3. (a) Evaluate  $365 \times 365 - 135 \times 135$

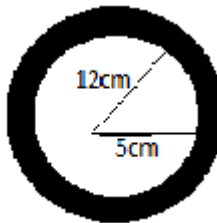
(b) The operation  $m * n$  is defined by  $m * n = \frac{1}{2}m - n$  find

(i)  $6 * 5$

(ii)  $(-2 * 1) * (-3)$

4. (a) Write  $5.84 \times 6$  in the form of  $A \times 10^n$ ,  $1 \leq A < 10$  and  $A$  is integer correct to 2 significant figures.

(b) Calculate the area of shaded part of the figure (use  $\pi = \frac{22}{7}$ )



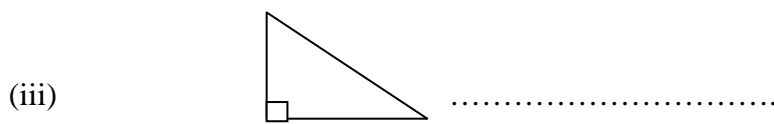
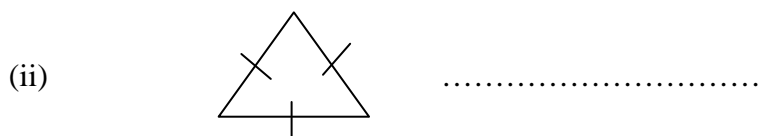
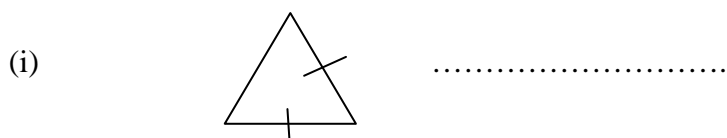
5. (a) The age of a father now is three times that of his son. If five years to come the age of father will be 5 years more than twice that of his son, find their present age.

(b) Eight lorry are each loaded with 12 tonnes of crude oil. Find the total mass of crude oil in kg.

6. (a) Simplify the following  $(27)^{1/3}$ ,  $(32)^{1/5}$

(b) Find the value of  $2xy$  if  $X^2 + y^2 = 34$  and  $x + y = 8$

7. (a) Name the types of triangles shown is the figure below



(b) Subtract the sum of  $2^{4/5}$  and  $4^{1/2}$  from  $8^{1/10}$

8. (a) Find the principal that will earn 9000 Shs. In 5 years at  $4^{1/2}\%$  per annum.

(b) Without using mathematical table find the value of

(i)  $\sin (70 - 10)^\circ$

(ii)  $\cos (70 - 10)^\circ$

(iii)  $\tan (70 - 10)^\circ$

**SECTION B: (40 MARKS)**

9. (a) Use mathematical table to find the volume of a sphere given by the formula:  $v = \frac{4\pi r^3}{3}$   
If:  $r = 20.6\text{cm}$  (take  $\pi = 3.142$ )


(b) The following table shows marks of form two students in a mathematics test at Algebra Islamic Seminary.

Marks (%)	40	45	50	55	60	65	70
Number of students	6	8	13	5	9	4	3

(i) If 50% was the pass mark, how many students passed the test?

(ii) What mark was scored by the majority of students?

(iii) Draw the frequency polygon.



10. (a) In a class of 50 students 16 students takes History, 40 students takes Physics, 7 students takes both subjects.

(i) Draw a Venn diagram to represent the information

(ii) How many students take physics only?

(iii) How many students take neither of the subjects?

(b) Find the solution of the following pair of equation graphically.

$$\begin{cases} 2x + y = 10 \\ 2x - 2y = 1 \end{cases}$$

