

MINISTRY OF EDUCATION, SCIENCE AND TECHNOLOGY
SUBJECT: ENGLISH

NAME _____ **DATE** _____ **STD V**

TIME 1:30HRS

Answer all questions

SECTION A: TENSES

1. The chapter _____ closed.
(a) had been (b) has (c) have (d) had ()
2. The boys _____ football yesterday
(a) play (b) plays (c) played (d) playing ()
3. At present the rains is _____ heavily
(a) rains (b) rained (c) raining (d) rain ()
4. You have _____ your work nicely, you deserve credits
(a) did (b) do (c) doing (d) done ()
5. They are _____ to play football match tomorrow.
(a) go (b) going (c) goes (d) went ()
6. I _____ a lion yesterday
(a) saw (b) seen (c) see (d) will see ()
7. If you don't eat, you _____ hungry tomorrow
(a) will be (b) were (c) are (d) be ()
8. Careen and Janeth are in the same height. Careen is _____ tall _____ Yusufu
(a) Same- as (b) different from (c) samelike (d) as.....as ()
9. Did you _____ to school last week?
(a) go (b) goes (c) went (d) gone ()
10. She has _____ a letter to her friend
(a) write (b) wrote (c) written (d) writes ()
11. It _____ in April and May.
(a) rain (b) rains (c) will be raining (d) rained ()
12. The man _____ in the farm now
(a) dig (b) is digging (c) has dig (d) digs ()
13. It always _____ milk.
(a) drink (b) drinks (c) drinking (d) drank ()
14. We always _____ our friends
(a) visits (b) visited (c) visiting (d) visits ()
15. Can she _____ that work?
(a) do (b) does (c) did (d) done ()

SECTION B: GRAMMAR

16. How _____ bags of salt do you have?
(a) more (b) many (c) much (d) the ()
17. _____ Maulid nor Hamis came to see me one month ago
(a) Either (b) Although (c) Neither (d) Despite ()
18. That dog can't hunt me _____?
(a) Can it (b) is it (c) will it (d) cant it ()

- 19.No one helped me, I did it _____
 (a) Myself (b) together (c) only me (d) me as me ()
- 20.Kapanya has been in the same school since _____
 (a) 10 years (b) many years (c) a week (d) 2005 ()
21. _____you work hard, you will become rich.
 (a) ever (b) even if (c) so that (d) if ()
- 22.That is his book. It belongs to _____
 (a) he (b) his (c)his book (d) him ()
- 23.That is the colour of the dress _____ I like most
 (a) which (b) that (c) whose (d) who ()
- 24.There is _____ in my pocket
 (a) anything else (b) somebody else (c) nobody else (d) nothing else ()
- 25.The cow walks _____
 (a) slowly (b) slowing (c) slow (d) slows ()
- 26.I met her _____the way
 (a) on (b) in (c) at (d) along ()
- 27.He asked the girl “ How old are you? _____
 (a) eleven years (b) I am old than you (c) No I am not old (d) I am eleven years old.
- 28.We were thinking _____going to grace next week
 (a) for (b) about (c) of (d) with ()
- 29.We usually cut oranges _____ knife
 (a) with (b) and (c)by (d) for using ()
- 30.Most of standard five pupils are found _____English
 (a) at (b) in (c) on (d) of ()

SECTION C: VOCABULARY

- 31.Female parent is called _____
 (a) Mother (b) Father (c) brother (d) grandfather ()
- 32.The word thrice means _____times.
 (a) one (b) two (c) three (d) four ()
- 33.A young cat is called _____
 (a) Kid (b) cub (c) kitten (d) baby ()
- 34.The opposite of the word come _____
 (a) came (b) go (c)run (d) come in ()
- 35.A place where milk is processed and sold is called _____
 (a) a diary (b) a dairy (c)a butcher (d) a shop ()

This section has five mixed sentences. Arrange the sentences so as to make a good composition by giving them letters A-E.

- 36.She was attacked by a crocodile and died immediately. _____
- 37.She jumped into the pool without reading the caution sign written “crocodiles inside. _____
- 38.It was a hot sunny and what Mary wanted was some water to cool her body ____.
- 39.She then saw a pool of water across the road . _____
- 40.One day. _____

SECTION B: Comprehension

Read the following passage carefully and then answer the questions that follow

Once upon time, there was a boy who used to steal chicken from his neighbors. One day he was caught stealing a very big chicken from an old woman, who lived all by herself. The boy was badly beaten by the villagers before being taken to the police station.

One of the policemen told the thief that, he was lucky that day and if he didn't change his behavior and stop stealing, he might end up being burnt alive.

The boy was asked if he knew that and he answered calmly, "Yes sir, I know that but because I am used to stealing, I can't stop immediately. In the past I used to steal one chicken a week. But from tomorrow I'll steal one a month. In this way, by the next year I will have stopped being a thief."

QUESTIONS

41. After the boy was beaten by the villagers, where was he taken to? _____
42. The suitable word to replace the word "change" as used in the passage can be _____
43. How many chickens did he steal per week? _____
44. What do we learn from the story? _____
45. What is title for this passage? _____

WIZARA YA ELIMU, SAYANSI NA TEKNOLOJIA
SOMO: KISWAHILI

JINA _____ TAREHE _____ DRS V SAA 1:30

Jibu maswali yote

SEHEMU A: Chagua herufi ya jibu sahihi

1. Katika muwa _____ za katikati huwa tamu kuliko za nchani
a) Bua b) Kipande c) Pingili d) Mizani []
2. Kutokana na ukame mahindi yalikauka kabla hayajatoa _____
a) Unga b) Mbelewele c) Masikio d) Mizizi []
3. _____ ya uhatawi wake katika michezo pia ni mwerevu katika masomo yake
a) Licha b) Miongoni c) Ukizingatia d) Baina []
4. _____ upate ungali maji
a) Mazao b) Mavuno c) Mifugo d) Udongo []
5. Mwalimu ali _____ baada ya mwanafunzi kumzingizia kuwa ameiba
a) Shereheko b) Ghadhabika c) Stahimili d) Kingeuka []
6. Ukumbuu wa babu mrefu. Kitendawili hiki jibu lake ni _____
a) Barabara kuu b) Njia panda c) Njia d) Kijito []
7. Kama siyo kusini mtakwenda kaskazini na kama sio magharibi mtakwenda _____
a) Kusini b) Magharibi c) Mashariki d) Juu []
8. Kuna msemu usemao, maji hufuata _____
a) Mkondo b) Korongo c) Mvua d) Daraja []
9. Asingechelewa shule _____ adhibiwa
a) Asingeli b) Angeli c) Ange d) Asinge []
10. Majambazi walidhamiria kumwua. Neno dhamiria lina maana _____
a) Amua b) Kusudia c) Dhania d) Shuhudia []
11. Mwalimu alimtaka Chakununa amtajie ubini wake. Alitaka Chakununa ataje _____
a) Jina lake b) Jina la baba yake c) Jina la ukoo tu d) Hakuna jibu sahihi []
12. Kutokana na maendeleo ya Sayansi na teknolojia, matukio mengi huonekana kwenye _____
a) Mtindio b) Mtandao c) Mtandio d) Utandawazi []
13. Machupa alisimama kizimbani kujibu shitaka. Neno kizimbani lina maana _____
a) Sehemu iliyiko kituo cha polisi b) Kiwanda cha maziwa
c) Sehemu maalum ya kusimama wakati wa kujibu mashtaka mahakamani d) Sehemu ya kuhifadha silaha jeshini []
14. Kwenda kombo maana yake ni _____ - []
a) Kwenda msalani b) Kwenda vibaya c) Kwenda haja kubwa d) Kwenda kwa pupa
15. Kinyume cha neno kupwa ni _____ []
a) Kuzama b) Kupaa c) Kuelea d) Kujaa
16. Kulikuwa na tafrija kidogo kwa ajili ya siku yangu ya kuzaliwa. Neno tafrija lina maana ya _____ []
a) Sherehe b) Friji c) Shukrani d) Zawadi

17. Haki za watoto ni pamoja na _____
a) Kupata wlimu, zawadi na kusaidia wazazi b) Chakula, kusoma na kuogelea
c) Michezo, sarakazi na kufanya usafi d) Elimu, chakula na mavazi []
18. Ugonjwa wa trakoma unashambulia mtu sehemu gani ya mwili? _____
a) Kiuno b) Macho c) Ngozi d) Shehemu za siri []
19. Nilipofika nyumbani kwao, nilimkuta shambani akipalilia _____
a) Ndizi b) Mikungu ya ndizi c) Migomba d) Vichane vya ndizi []
20. Karibu na nyumba yao, kuna maduka makubwa ya jumla na _____
a) Madogo madogo b) Rejareja c) Rejea d) Vidukaduka []

Toa maana za misamiati hii

21. Sababisha _____
22. Kujinasua _____
23. Tuna _____
24. Wadia _____
25. Ishara _____

Malizia methali zifuatazo

26. Ukiona vimeundwa _____
27. _____ mateke
28. Akunyimaye kunde _____

Tegua vitendawili hivi

29. Nina watoto watatu, mmoja mvivu, mmoja mtembezi na mwingine mkali _____,
_____ na _____
30. Mama nieleke _____

Andika vitenzi katika wakati unaostahili

31. Juma yuko bafuni _____ (oga)
32. Makelele _____ akiwa anacheza mpira uwanjani (vunjika)
33. Baba yangu _____ kila baada ya mwezi (safari)
34. _____ elimu ya msingi mwakani (maliza)
35. Jenifa _____ mwenye huzuni leo (onekana)

Andika sentensi zifuatazo katika kauli taarifa

36. Nitawaletea zawadi kesho _____
37. Wamenihuzunisha sana leo _____
38. Tembea upesi _____

Andika maneno yanayofanana na maneno haya

39. Kuongea _____
40. Matatizo _____

Soma barua ifuatayo kisha ujibu maswali

S/ M Mambalimba
S. L. P 2015,
Songea
10 Machi 2019

Rafiki mpendwa Diana,

Salaamu sana.

Ni matumani yangu kuwa wewe ni mzina wa afya njema. Mimi na rafiki zangu pia hatujambo.

Lengo kubwa la kukuandikia barua hii ni kutaka kukujulisha habari za huku. Shuleni kwetu siku hizi tumeanza mazoezi ya mpira wa netiboli kuanzia alasiri siku za Jumatatu na Ijumaa. Tutakuwa na mchezo wa kirafiki na shule ya kisiwani wiki ijayo. Tunategemea kushinda kuendana na mazoezi tuliyanayo.

Wasalimie rafiki zako Kiwandai na Juliana. Unasalimiwa na rafiki zangu Belinda na Jeremia.

*Wasaalam,
Rafiki yako Chausiku*

Maswali:

41. Nani mwandikaji wa barua hapo juu? _____
42. Nini dhumuni ya barua hiyo? _____
43. Ni lini siku za kufanya mazoezi? _____
44. Nakili anwani ya mwandikaji _____
45. Taja jina la mwandikiwa barua _____

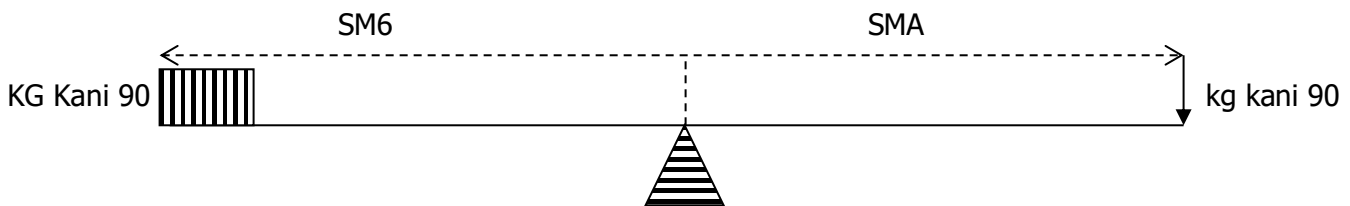
WIZARA YA ELIMU, SAYANSI NA TEKNOLOJIA
SOMO: SAYANSI NA TEKNOLOJIA

JINA _____ TAREHE _____ DRS V SAA 1:30

Jibu maswali yote

SEHEMU A : CHAGUA JIBU LILILO SAHIHI.

1. _____ ni kifaa kinachotumika kuangalia seli. (a) hadubini (b) kamera (c) dharubini (d) jicho []
2. _____ ni kiini cha msingi wa kiumbe hai. (a) vakuoli (b) sasitoplazimu (c) seli (d) bakteria []
3. Vimelea vilivyo kwenye iliamu huitwa _____ (a) vidole (b) mifupa (c) vila (d) utumbo. []
4. Sehemu majimaji ya damu huitwa _____ (a) seli nyeupe (b) plazma (c) seli nyekundu (d) chembelele. []
5. Mshipa wa _____ huingiza damu isiyo na oksijeni kwenye moyo. (a) aorta (b) ateri mapafu (c) vena kava (d) vena mapafu. []
6. Virusi vya UKIMWI hushambulia seli _____ za damu. (a) nyekundu (b) zote (c) nyeupe (d) kijani []
7. _____ ni virutubisho vya kulinda mwili. (a) fati (b) maji (c) protini (d) vitamini []
8. Kundi la viumbe hai linalotengeneza chakula chake ni _____ (a) wanyama (b) mimea (c) bakteria (d) maji. []
9. _____ ni kitu chochote kinachorahisisha kazi. (a) mkono (b) mashine (c) mbao (d) gurudumu []
10. Kipimo cha kani iliyotumika kufanya kazi ni _____ (a) gramu (b) nyutoni (c) juli (d) sentimeta []
11. _____ ni njia maalumu ya mkondo wa umeme. (a) sakiti (b) kihisi umeme (c) amita (d) seli []
12. Roda pia huitwa _____ (a) gurudumu kapi (b) waya (c) wenzo (d) kisima []
13. Umeme ni mtiririko wa _____ (a) chaji (b) elektroni (c) molekuli (d) ampea []
14. Msukumo au mvuto unaofanya maada isogeee huitwa _____ (a) kani (b) jitihada (c) mjongeo (d) wenzo. []
15. Thamani ya A katika wenzo ifuatayo ni _____ (a) sm 20 (b) sm 12 (c) sm 6 (d) sm 5. []



16. Katika mashine mzigo wa kilogramu kani 128 utahitaji jitihada ya kilogramu kani 32. Manufaa ya Kimakanika ni _____ (a) 4 (b) 7 (c) 12 (d) 8 []
17. _____ yana vimeng'anya vinavyobadili wanga kuwa sukari (a) mate (b) maji (c) nyongo (d) mafuta. []
18. Sumaku ina uwezo wa kuvuta vitu vyenye asili ya _____ (a) mbao (b) udongo (c) chuma (d) mawe []
19. Mche wa sumaku una nchi _____ (a) mbili (b) tatu (c) moja (d) tano. []
20. Damu hutwiwa oksijeni katika _____ (a) tumbo (b) vena (c) mapafu (d) moyo []

SEHEMU B: OANISHA FUNGU A NA B ILI KUPATA MAANA SAHIHI.

| NA. | FUNGU A | MAJIBU | | FUNGU B |
|-----|---------------------------------------|--------|----|------------------------------|
| 21. | Kujiuliza maswali juu ya jambo fulani | | A. | Viumbe wenye uti wa mgongo |
| 22. | Maeneo ya jangwa huwa na | | B. | Udadisi |
| 23. | Simba na binadamu | | C. | Mvua kidogo |
| 24. | Kiungulia | | D. | Kifani cha kitu |
| 25. | Taswira | | E. | Huvunyavunja mafuta |
| 26. | Nyongo | | F. | Kuhisi kuchomeka kwenye umio |
| 27. | Popo | | G. | Mkondo wa umeme |
| 28. | Hutuwezesha kutambua pande za dunia | | H. | Ananyonyesha na kuruka |

| | | | | |
|-----|-------------|--|----|------------------------------|
| 29. | Amita | | I. | Kujulisha kama umeme unapita |
| 30. | Galvanomita | | J. | Dira |

SEHEMU B : JAZA NAFASI WAZI.

31. Nini maana ya kiumbe hai _____
32. Taja aina mbili za mazingira _____ na _____
33. Taja aina mbili za mawasiliano _____ na _____
34. _____ ana miguu mirefu na shingo ndefu ili kufikia majani ya miti
35. Kizingiti mgando cha maji ni nyuzi _____ sent
36. Hewa inayovuma inaitwa _____
37. Sehemu kubwa ya miili ya viumbe hai ni _____
38. Taja matumizi ya redio _____
Taja sehemu kuu za redio
39. _____
40. _____
41. _____
42. _____
43. Nini maana ya mada _____
Taja aina kuu za mada
44. _____
45. _____

WIZARA YA ELIMU, SAYANSI NA TEKNOLOJIA
SOMO: URAI NA MAADILI

JINA _____ TAREHE _____ DRS V SAA 1:30

Jibu maswali yote

SEHEMU A – CHAGUA JIBU LILILO SAHIHI

1. TAKUKURU ni chombo cha serikali chenye mamlaka ya _____ (a) kupambana na kuzuia rushwa (b) kutetea haki za wanawake (c) kutetea haki za watoto (d) kutoa hukumu kwa Wala rushwa. []
2. Jukumu la kuwashirikisha wananchi katika suala la ulinzi na usalama wa mitaa yao ni la _____ (a) bunge (b) serikali kuu (c) TAKUKURU (d) serikali za mitaa. []
3. Utamaduni ni _____ (a) kielelezo cha uhai na utashi wa jamii (b) ngoma na nyimbo (c) lugha na mavazi (d) matambiko []
4. Moja kati ya mambo yafuatayo si katika matumizi ya rasilimali maji _____ (a) usafiri (b) kuendesha mitambo ya umeme (c) uvuvi (d) ulinzi. []
5. Mratibu Elimu kata hushughulikia masuala ya elimu ya _____ (a) msingi na watu wazima (b) msingi na sekondari (c) vyuo na sekondari (d) vyuo vikuu. []
6. _____ ni namna ya kujilinda au kujikinga na maadui (a) ulinzi (b) usalama (c) mgambo []
7. Madini yanayopatikana Tanzania peke yake ni _____ (a) dhahabu (b) tanzanaiti (c) almasi (d) chokaa. []
8. Kazi ya mahakama ni _____ (a) kutoa haki kwa kuzingatia sheria (b) kutetea haki za Binadamu (c) kutenga sheria za nchi (d) kupambana na kuzuia rushwa. []
9. Lugha kuu ya taifa letu ni _____ (a) kizaramo (b) kisukuma (c) Kiswahili (d) kifaransa []
10. Wanyama kama simba, chui na fisi _____ (a) ni hatari kwa maisha ya watu (b) wanapendwa na watu (c) hupendwa na watalii (d) wana rangi ya kuvutia. []
11. Vita ni _____ (a) ajali (b) uhalifu (c) uvunjifu wa Amani (d) mapigano baina ya watu Wenye mitazamo tofauti. []
12. Misingi ya ulinzi na usalama ni _____ (a) kuleta usalama (b) ulinzi wa watu na mali zao (c) kujikinga na kujilinda (d) matukio ya kiuhalifu. []
13. Jambo linalomlazimu mtu kulitimiza ni _____ (a) sheria (b) wajibu (c) kanuni (d) haki. []
14. Diwani wa kata huchaguliwa kila baada ya miaka _____ (a) 10 (b) 8 (c) 3 (d) 5 []
15. Hapa Tanzania kuna lugha za makabila zaidi ya _____ (a) 102 (b) 120 (c) 210 (d) 2000 []

OANISHA FUNGU A NA B ILI KUPATA MAANA KAMILI

| | FUNGU A | JIBU | | FUNGU B |
|-----|----------------|-------------|---|---|
| 16. | UKIMWI | | A | Kiongozi wa kuchaguliwa. |
| 17. | Mila | | B | Jambo la kawaida linalotendwa kila siku na jamii |
| 18. | Dema | | C | Kielelezo cha uhai na utashi wa jamii fulani |
| 19. | Rasilimali | | D | Nyavu zenye matundu madogo zinazotumika katika uvuvi. |
| 20. | Diwani | | E | Mtego wa kuvulia samaki |
| 21. | Utamaduni | | F | Huambukiza kwa kujamiana |
| 22. | Mahakama | | G | Mambo yanayofanywa na jamii kwa muda mrefu |
| 23. | Utawala bora | | H | Huteuliwa na manispaa au halmashauri ya wilaya |
| 24. | Ulinzi | | I | Hazina ya nchi iletayo manufaa. |
| 25. | CHAVITA | | J | Huusika na utoaji wa haki kwa mujibu wa sheria |
| | | | K | Uongozi unaofuata Misingi ya haki na sheria |
| | | | L | Hushughulika na masuala ya viziwi |
| | | | M | Kujilinda au kujikinga na maadui |

ANDIKA KIREFU CHA VIFUPISHO VIFUATAVYO

26. TAKUKURU _____
27. TAMWA _____
28. CUF _____
29. TAWLA _____
30. UKIMWI _____
31. C C M _____
32. CHADEMA _____
33. T L P _____

SEHEMU B – JAZA NAFASI ZILIZO WAZI

34. Baadhi ya nguo huvaliwa na jinsi zote kama vile _____
35. Mtendaji mkuu wa shughuli za serikali ya kata ni _____
36. Upendo nini? _____
37. Lugha ni _____
38. Umri wa mtu kuruhusiwa kupiga kura ni kuanzia miaka _____
39. Vielelezo vya utamaduni ni _____, _____, na _____
40. Bendera ya taifa ina rangi ngapi? _____

Chunguza picha hii kisha jibu maswali

41. Huyu ni anaitwa nani? _____
42. Alikuwa na cheo gani serikalini? _____
43. Alimalaiza muda wake wa uongozi mwaka gani? _____
44. Nini maana ya upendo _____
45. Ushirikiano nini? _____



WIZARA YA ELIMU, SAYANSI NA TEKNOLOJIA
SOMO: MAARIFA YA JAMII

JINA _____ TAREHE _____ DRS V SAA 1:30

Jibu maswali yote

SEHEMU A : CHAGUA JIBU SAHIHI

1. Taifa lililokomesha biashara ya watumwa Afrika mashariki ni _____
(a) wajerumani (b) wafaransa (c) wareno (d) waingereza []
2. Soko kuu la watumwa Zanzibar lilifungwa mnamo mwaka _____
(a) 1873 (b) 1874 (c) 1875 (d) 1879 []
3. Wamisionari ni watangulizi wa kikoloni wa _____ kuja Tanganyika na Zanzibar
(a) tatu (b) pili (c) kwanza (d) nne []
4. Mimea inayopandwa huitwa _____ (a) uoto wa asili
(b) maji (c) uoto wa kupandwa (d) wanyama pori []
5. Chanzo kikuu cha mto Naili ni _____ (a) ziwa Turkana
(b) ziwa victoria (c) ziwa nyasa (d) ziwa Albert []
6. Johann Rebman ni mjerumani wa mwanzo kutembelea na kuona mlima wa Kilimanjaro
mwaka _____ (a) 1859 (b) 1858 (c) 1848 (d) 1875 []
7. Dr. David Livingstone ni _____ wa mwanzo kufika ziwa Nyasa mwaka 1859
(a) mwingereza (b) mreno (c) mjerumani (d) Mmisionari []
8. Wapelelezi walianza kuingia tanganyika na Zanzibar mnamo karne ya _____
(a) 14 (b) 15 (c) 16 (d) 19 []
9. "Cape of Good Hope" inatokana na jina la _____
(a) mto samaki (b) ngome ya Yesu (c) mreno (d) Rasi ya tumaini jema []
10. Wafanyabiashara wa mwanzo kutoka bara la Asia walitokea nchi ya _____
(a) china (b) India (c) Omani (d) Indonesia []
11. Makundi ya vitangulizi vya ukoloni Tanganyika na Zanzibar yalikuwa _____
(a) mawili (b) matatu (c) matano (d) manne []
12. Familia ni watu _____ (a) wenye uhusiano wa karibu sana (b) wanaoishi mtaa mmoja
(c) wanaoishi nyumbani moja (d) watoto []
13. Sultani wa kwanza kutawala Zanzibar alitwa _____
(a) Seyyid (b) Seyyid said (c) Seyid Majid (d) Seyyid Thuman []
14. Tanganyika ilitawaliwa na _____ (a) waingereza na wajerumani
(b) waarabu na wahindi (c) wachina na wazungu (d) waarabu na watu wa Pwani []
15. Sultani seyyid said alifariki dunia mwaka _____
(a) 2000 (b) 2001 (c) 1990 (d) 1856 []
16. Sultani seyyid said alihamishia makao yake Zanzibar mwaka _____
(a) 1866 (b) 1888 (c) 1890 (d) 1840 []
17. Tanganyika ambayo kwa sasa ni Tanzania ilipata uhuru wake mwaka _____
(a) 1965 (b) 1961 (c) 1978 (d) 1840 []
18. Mkutano wa Berlin ulikuwa mwaka _____
(a) 1884 – 1885 (b) 1886 – 1890 (c) 1886 – 1888 (d) 1889 – 1891 []
19. Kampuni ya kibiashara ya kingereza Afrika Mashariki iliongozwa na _____
(a) Wiliam Macknon (b) Harry Johnston (c) Karl Peters (d) Johnn Rebman []
20. Mkutano wa bertin wa kuligawa Bara la Afrika ulifanyika mjini _____
(a) Berlin (b) London (c) Roma (d) Paris []
21. Sayari iliyo kubwa kuliko zote ni _____ (a) dunia (b) sambula (c) zuhura (d) utaridi []
22. Sayari iliyo ndogo kushinda zote ni _____ (a) mirihi
(b) saratani (c) kausil (d) zebaki []

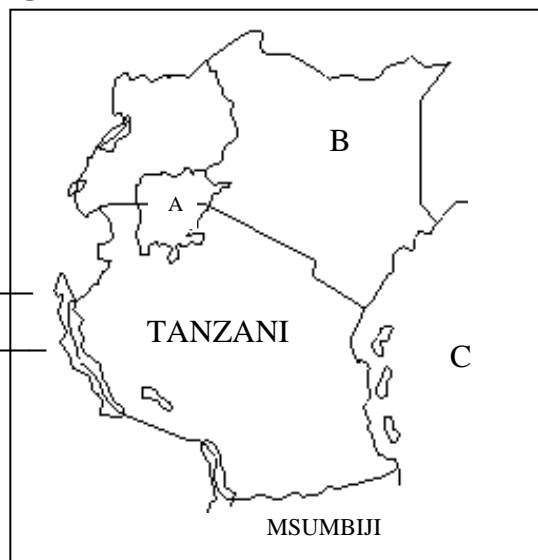
23. Mstari wa Ikweta una nyuzi _____ (a) 360^0 (b) 0^0 (c) 23.5^0 (d) 180^0 []
24. Dunia ikijizungusha katika mhimili wake tunapata _____ (a) majira ya kiangazi (b) usiku na mchana (c) maji kupwa na kujaa (d) masika na kipupwe []
25. Mfumo wa mapato na matumizi ya watu katika tarafa, wilaya au nchi huitwa _____ (a) utamaduni (b) uchumi (c) unyonyaji (d) ubepari []
26. Dunia hulizunguka jua kwa siku _____ (a) $365\frac{1}{4}$ (b) $360\frac{1}{4}$ []
27. Msukumo wa hewa huweza kupimwa kwa urefu wa mhimili kwa kutumia _____ (a) themometa (b) barometa (c) zebaki (d) uelekeo []
28. Ngongoro ni kivutio cha watalii katika mkoa wa _____ (a) Manyara (b) Mtwara (c) Arusha (d) Morogoro []
29. Mazingira ni _____ (a) vitu vyote vyote vilivyomo shule (b) misitu, mawe na nyumba (c) vitu vyote vinavyomzunguka kiumbe (d) wanyama na mimea []
30. Sababu mojawapo ya uharibifu wa mazingira ni _____ (a) ukataji wa miti bila kupamba mingine (b) kutotupa takataka ovyo (c) kutolima karibu na vyanzo vya maji (d) kuonyesha misitu na vyanzo vya maji []
31. Dira ni kifaa kinachotumika kuonyesha _____ (a) msafiri anakoelekea (b) shule iko wapi (c) jua linachomoza upande gani (d) jua linakozama []
32. Sehemu ya ardhi iliyoinuka na ardhi yake ni tambarare ni _____ (a) uwanda wa juu (b) uwanda wa chini (c) tambarare (d) mlima []
33. Mwinuko, mito, maziwa, mabwawa na bahari ni vitu vinavyounda _____ (a) sura ya nchi (b) kontua (c) bonde (d) pitio []
34. Jina Tanzania limetokana na muungano wa _____ (a) Uganda na pemba (b) pemba na Tanganyika (c) Unguja na Tanganyika (d) Tanganyika na Zanzibar []
35. Ipi ni milima ya tofali kati ya milima ifuatayo _____ (a) Kilimanjaro (b) Usambara (c) Oldonyo lengai (d) Meru []
36. Mlima Elgoni upo nchini _____ (a) Kenya (b) Uganda (c) Tanzania (d) Arusha []
37. Nchi zinazowinda Afrika mashariki ni _____ (a) Tanzania na Burundi (b) Kenya, Uganda na Tanzania (c) Kenya, Rwanda na Uganda (d) Malawi, Kongo na Burundi []
38. Pareto ni zao ambalo hutumika kutengeneza _____ (a) manukato (b) dawa ya meno (c) dawa ya kuulia wadudu (d) chakula cha mifugo []
39. Madini ya _____ hupatikana mwadui, mkoani Shinyanga (a) Dhahabu (b) bati (c) almasi (d) utanga []
40. Mstari wa _____ mwa Ikweta upo upande wa (a) kaskazini (b) kusini (c) uvuvi (d) magharibi []

SOMA RAMANI IFUATAYO KISHA JIBU SWALI LA 41-43

41. Herufi A inaonyesha ziwa _____

42. Herufi B inaonyesha nchi ya _____

43. Herufi C inaonyesha bahari ya _____



44. Taja athari mbili za biashara ya utumwa

(i) _____

(ii) _____

45. Taja makundi ya vitangulizi vya ukoloni

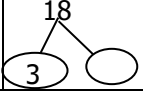
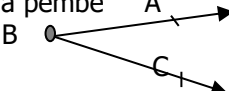
(i) _____

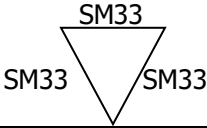
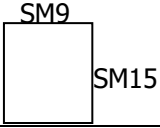
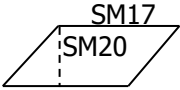
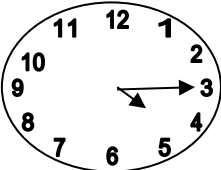
(ii) _____

WIZARA YA ELIMU, SAYANSI NA TEKNOLOJIA
SOMO: HISABATI

JINA _____ TAREHE _____ DRS V SAA 1:30

Jibu maswali yote

| | SWALI | KAZI | | JIBU |
|-----|---|------|--|------|
| 1. | $6492 + 2504 =$ | | | |
| 2. | $\begin{array}{r} 81383 \\ +12849 \\ \hline \end{array}$ | | | |
| 3. | $5637 - 3434 =$ | | | |
| 4. | $\begin{array}{r} 43\ 813 \\ -26\ 751 \\ \hline \end{array}$ | | | |
| 5. | $145 \times 5 =$ | | | |
| 6. | $\begin{array}{r} 1281 \\ \times 59 \\ \hline \end{array}$ | | | |
| 7. | $497 \div 7 =$ | | | |
| 8. | $30 \overline{) 690}$ | | | |
| 9. | Tafuta wastani wa 85, 25, 46 | | | |
| 10. | Tafyta kipeuo cha pili cha $\sqrt{\quad} 81 =$ | | | |
| 11. | Tafuta namba inayokosekana  | | | |
| 12. | Tafuta K.K.S cha 4 na 6 | | | |
| 13. | Vigawo vya 6 ni vipi ? | | | |
| 14. | Namba mraba ya 18 ni ipi | | | |
| 15. | Tafuta K.D.S cha 2 na 3 | | | |
| 16. | Andika kwa namba za kirumi 29 | | | |
| 17. | $\frac{15}{22} + \frac{4}{22} + \frac{2}{22} =$ | | | |
| 18. | $\frac{5}{9} - \frac{1}{2} =$ | | | |
| 19. | $\frac{5}{8} \times \frac{3}{8} =$ | | | |
| 20. | $\frac{3}{4} \div 3 =$ | | | |
| 21. | Badili kuwa XXXIX namba za kawaida | | | |
| 22. | $\begin{array}{r} 55 \\ +25 \\ \hline \end{array}$ | | | |
| 23. | $\begin{array}{r} 99 \\ -44 \\ \hline \end{array}$ | | | |
| 24. | $15 \times 52 =$ | | | |
| 25. | 70% Badili kuwa sehemu | | | |
| 26. | Badili 30 kuwa namba za kirumi | | | |
| 27. | Taja majina ya kila pembe  | | | |

| | | | | | | | | | | | | | | | | |
|------|---|------|--------|-----|----------------|-----|-----|-----|-----|-----|--|--|--|--|--|--|
| 28. | Tafuta mzingo wa umbo lifuatalo  | | | | | | | | | | | | | | | |
| 29. | Tafuta eneo la mstatili ufuatao  | | | | | | | | | | | | | | | |
| 30. | Andika kwa maneno 97864 | | | | | | | | | | | | | | | |
| 31. | Tafuta thamani ya a $a + 4 = 8$ | | | | | | | | | | | | | | | |
| 32. | $a - 12 = 16$ | | | | | | | | | | | | | | | |
| 33. | $\frac{1}{3}z = 12$ | | | | | | | | | | | | | | | |
| 34. | $2a = 10$ Tafuta thamani ya a | | | | | | | | | | | | | | | |
| 35. | <table style="border-collapse: collapse; margin-left: 20px;"> <tr> <td style="padding-right: 20px;">M</td> <td style="padding-right: 20px;">sm</td> <td>mm</td> </tr> <tr> <td style="padding-right: 20px;">6</td> <td style="padding-right: 20px;">24</td> <td>6</td> </tr> <tr> <td style="padding-right: 20px;">+3</td> <td style="padding-right: 20px;">12</td> <td>3</td> </tr> <tr> <td colspan="3" style="border-top: 1px solid black; padding-top: 5px;"></td> </tr> </table> | M | sm | mm | 6 | 24 | 6 | +3 | 12 | 3 | | | | | | |
| M | sm | mm | | | | | | | | | | | | | | |
| 6 | 24 | 6 | | | | | | | | | | | | | | |
| +3 | 12 | 3 | | | | | | | | | | | | | | |
| | | | | | | | | | | | | | | | | |
| 36. | Tafuta eneo la msambamba  | | | | | | | | | | | | | | | |
| 37. | <table style="border-collapse: collapse; margin-left: 20px;"> <tr> <td style="padding-right: 20px;">Km</td> <td style="padding-right: 20px;">hm</td> <td>dam</td> </tr> <tr> <td style="padding-right: 20px;">9</td> <td style="padding-right: 20px;">2</td> <td>8</td> </tr> <tr> <td style="padding-right: 20px;">- 5</td> <td style="padding-right: 20px;">9</td> <td>7</td> </tr> <tr> <td colspan="3" style="border-top: 1px solid black; padding-top: 5px;"></td> </tr> </table> | Km | hm | dam | 9 | 2 | 8 | - 5 | 9 | 7 | | | | | | |
| Km | hm | dam | | | | | | | | | | | | | | |
| 9 | 2 | 8 | | | | | | | | | | | | | | |
| - 5 | 9 | 7 | | | | | | | | | | | | | | |
| | | | | | | | | | | | | | | | | |
| 38. | Gramu (g) 1000 = kg? | | | | | | | | | | | | | | | |
| 39. | <table style="border-collapse: collapse; margin-left: 20px;"> <tr> <td style="padding-right: 20px;">tani</td> <td style="padding-right: 20px;">kg</td> <td>g</td> </tr> <tr> <td style="padding-right: 20px;">10</td> <td style="padding-right: 20px;">400</td> <td>172</td> </tr> <tr> <td style="padding-right: 20px;">+ 6</td> <td style="padding-right: 20px;">351</td> <td>937</td> </tr> <tr> <td colspan="3" style="border-top: 1px solid black; padding-top: 5px;"></td> </tr> </table> | tani | kg | g | 10 | 400 | 172 | + 6 | 351 | 937 | | | | | | |
| tani | kg | g | | | | | | | | | | | | | | |
| 10 | 400 | 172 | | | | | | | | | | | | | | |
| + 6 | 351 | 937 | | | | | | | | | | | | | | |
| | | | | | | | | | | | | | | | | |
| 40. | <table style="border-collapse: collapse; margin-left: 20px;"> <tr> <td style="padding-right: 20px;">Saa</td> <td>dk</td> </tr> <tr> <td style="padding-right: 20px;">4</td> <td>13</td> </tr> <tr> <td style="padding-right: 20px;">+3</td> <td>32</td> </tr> <tr> <td colspan="2" style="border-top: 1px solid black; padding-top: 5px;"></td> </tr> </table> | Saa | dk | 4 | 13 | +3 | 32 | | | | | | | | | |
| Saa | dk | | | | | | | | | | | | | | | |
| 4 | 13 | | | | | | | | | | | | | | | |
| +3 | 32 | | | | | | | | | | | | | | | |
| | | | | | | | | | | | | | | | | |
| 41. | <table style="border-collapse: collapse; margin-left: 20px;"> <tr> <td style="padding-right: 20px;">Saa</td> <td>dakika</td> </tr> <tr> <td style="padding-right: 20px;">2</td> <td>10 20</td> </tr> <tr> <td colspan="2" style="border-top: 1px solid black; padding-top: 5px;"></td> </tr> </table> | Saa | dakika | 2 | 10 20 | | | | | | | | | | | |
| Saa | dakika | | | | | | | | | | | | | | | |
| 2 | 10 20 | | | | | | | | | | | | | | | |
| | | | | | | | | | | | | | | | | |
| 42. | <table style="border-collapse: collapse; margin-left: 20px;"> <tr> <td style="padding-right: 20px;">Juma</td> <td>siku</td> </tr> <tr> <td style="padding-right: 20px;">40</td> <td>3</td> </tr> <tr> <td style="padding-right: 20px;">+ 9</td> <td>6</td> </tr> <tr> <td colspan="2" style="border-top: 1px solid black; padding-top: 5px;"></td> </tr> </table> | Juma | siku | 40 | 3 | + 9 | 6 | | | | | | | | | |
| Juma | siku | | | | | | | | | | | | | | | |
| 40 | 3 | | | | | | | | | | | | | | | |
| + 9 | 6 | | | | | | | | | | | | | | | |
| | | | | | | | | | | | | | | | | |
| 43. | <table style="border-collapse: collapse; margin-left: 20px;"> <tr> <td style="padding-right: 20px;">Sh</td> <td>st</td> </tr> <tr> <td style="padding-right: 20px;">645</td> <td>30</td> </tr> <tr> <td style="padding-right: 20px;">+40</td> <td>50</td> </tr> <tr> <td colspan="2" style="border-top: 1px solid black; padding-top: 5px;"></td> </tr> </table> | Sh | st | 645 | 30 | +40 | 50 | | | | | | | | | |
| Sh | st | | | | | | | | | | | | | | | |
| 645 | 30 | | | | | | | | | | | | | | | |
| +40 | 50 | | | | | | | | | | | | | | | |
| | | | | | | | | | | | | | | | | |
| 44. | Andika wakati ulioonyeshwa katika uso wa saa  | | | | | | | | | | | | | | | |
| 45. | Saa 7 + saa 3 = | | | | | | | | | | | | | | | |